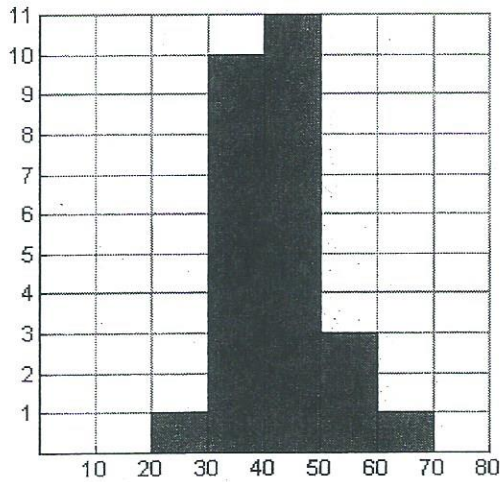
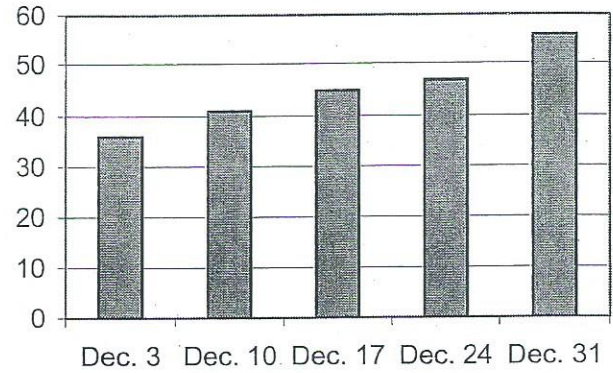


Activity Master: Card Match

Cut along dotted lines.

Attendance

Group	Number
Men	14,760
Women	12,960
Children	8,280

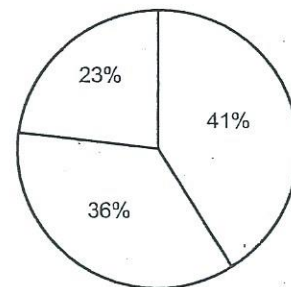


Ages

23	30	32	34	35
36	36	36	38	39
39	41	41	44	45
45	45	46	47	47
47	49	53	53	56
62				

Game Attendance

Date	Attendance (thousands)
12/3	36
12/10	41
12/17	45
12/24	47
12/31	56



Card Match Recording Sheet

Attach the appropriate graph and table for each scenario. Complete the graphs by labeling the axes and creating titles. Then determine if each of the statements beneath each scenario is true or false.

Scenario 1

The attendance at each football game in December is recorded.

Graph	Table
-------	-------

- 1 The combined attendance at the December 3rd and December 31st games is equal to the combined attendance at the December 17th and December 24th games. (True or False)

- 2 Approximately 10% more people attended the December 17th game than attended the December 10th game. (True or False)

Scenario 2

The percent of attendance by men, women, and children is determined for the December 3rd football game.

Graph	Table
-------	-------

- 3 More than twice as many men attended the game as children. (True or False)
- 4 Women accounted for 36% of the attendees at the game. (True or False)

Scenario 3

The ages of people that won tickets to the December 3rd game are recorded.

Graph	Table
-------	-------

- 5 The number of winners that are ages 20 to 29 is the same as the number of winners that are ages 60 to 69. (True or False)
- 6 There are more than 4 times the number of winners in the ages 40 to 49 interval than the ages 50 to 59 interval. (True or False)